

# 4

## 마름모에서 각도 구하기



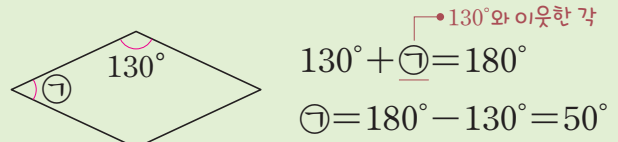
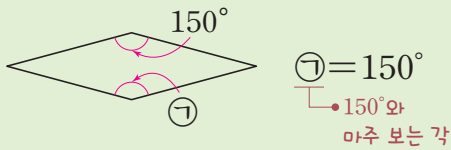
공부한 날

월

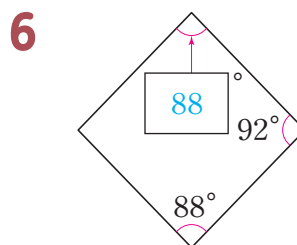
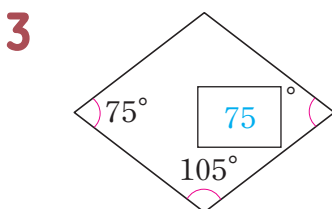
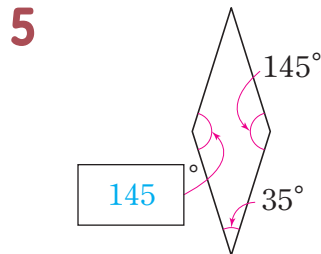
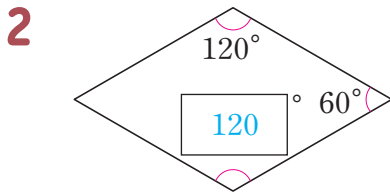
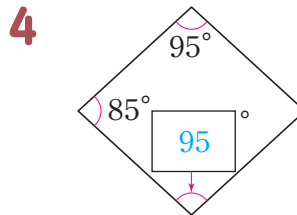
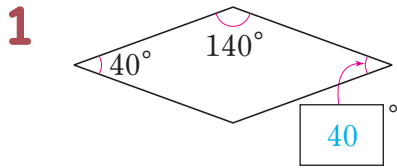
일

걸린 시간  
분

- ✔ 마름모에서 마주 보는 두 각의 크기는 서로 같습니다.
- ✔ 마름모에서 이웃한 두 각의 크기의 합은  $180^\circ$ 입니다.
- 예 마름모에서  $\odot$ 의 크기 구하기

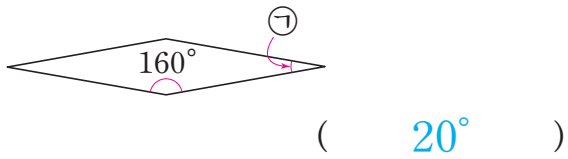


1~6 마름모에서 □ 안에 알맞은 수를 써넣으시오.

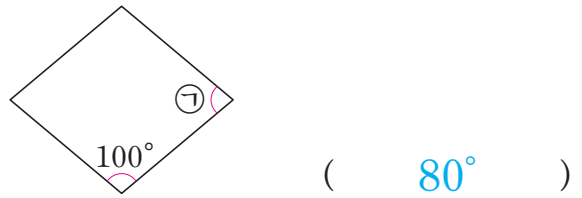


7~18 마름모에서 ㉠의 크기를 구하시오.

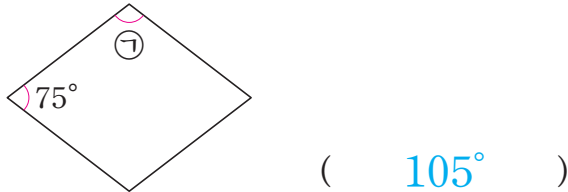
7




13



8



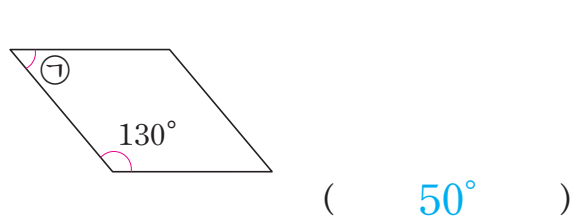
14



9



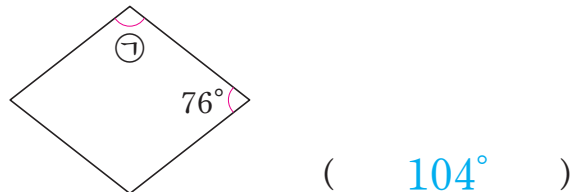
15



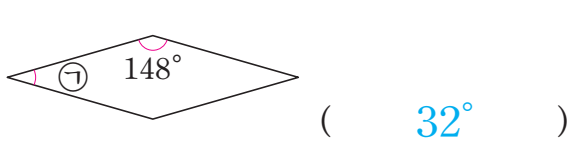
10



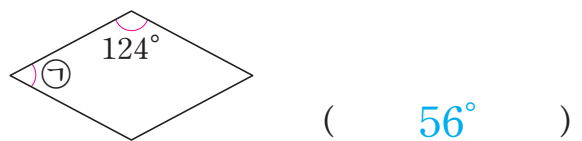
16



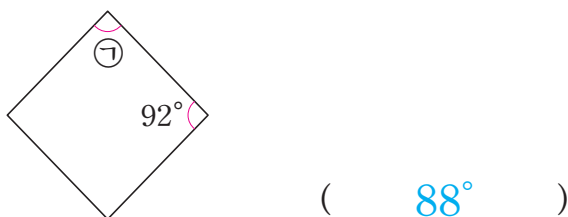
11



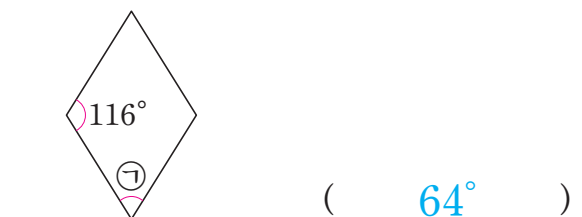
17



12

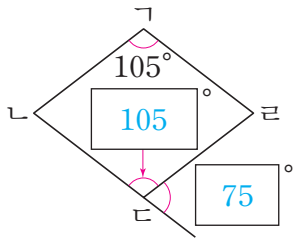


18

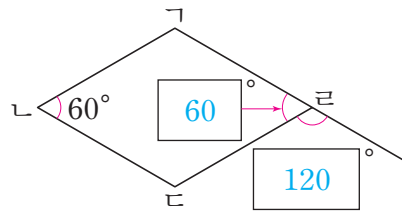


19~28 사각형 기하학은 마음모입니다. □ 안에 알맞은 수를 써넣으시오.

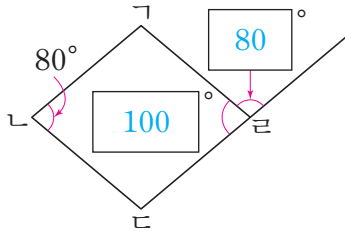
19



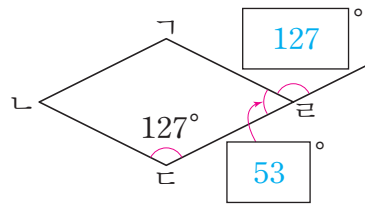
24



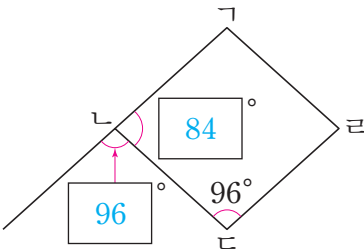
20



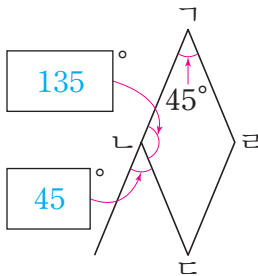
25



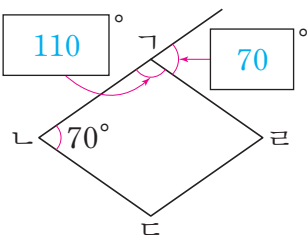
21



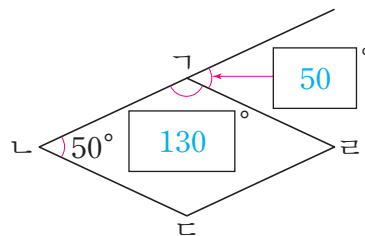
26



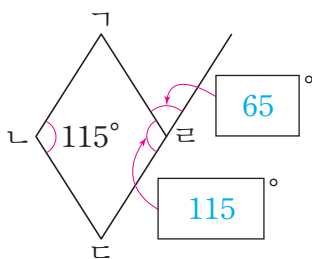
22



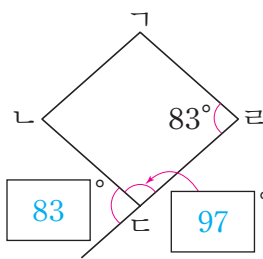
27



23



28



**실력 Check!** 재점검하여 자신의 실력을 확인해 보세요!

**엄마의 확인 Note** 칭찬할 점과 주의할 점을 써주세요!

맞힌 개수

26개 이상

연산왕! 참 잘했어요!

개/28개

20~25개

틀린 문제를 점검해요!

19개 이하

차근차근 다시 풀어요!

칭찬



주요

# 에스파냐의 문화유산



\* 교차점: 서로 엇갈리거나 마주친 곳